

















**Year Four – solve the problem  
and return it to Mrs Britton to receive a house point**

Name: ..... Class: ..... House: .....

**Shape puzzle**

Each shape stands for a number.

The numbers shown are the totals of the numbers in the row or column.

				<input type="text"/>
				<input type="text" value="25"/>
				<input type="text" value="20"/>
				<input type="text"/>
<input type="text"/>	<input type="text"/>	<input type="text"/>	<input type="text" value="26"/>	

Find the totals of the remaining rows and columns.