

Name: _____

Class: _____ Date: _____

1 a) $725 + 8 =$


b) $725 - 8 =$

2 a) $478 + 50 =$

b) $531 - 50 =$

3 a) $\frac{7}{8} - \frac{3}{8} =$

b) $\frac{3}{8} + \frac{3}{8} =$




4 a) $7 \times 5 =$

b) $7 \times 50 =$

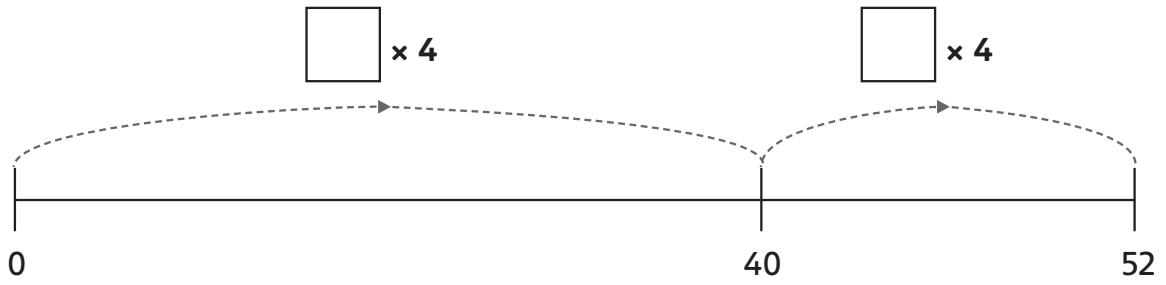
5 $5 \times 24 =$

\times	20	4
5		



6

$52 \div 4 =$

**7**

$546 + 27 =$

You can use the space below for jottings.

8

Use a mental method to work out $724 + 130 =$

You can use the space below for jottings.

9


Use a written method to solve $267 + 158$.



10

Use a written method to solve $432 + 126 + 218$.

A 5x15 grid for writing a method. A small rectangle is drawn in the grid, spanning 3 columns and 1 row, located in the 4th row from the top and the 13th to 15th columns from the left.



For teacher use

Your mark	_____ out of 10
What went well	
How to improve	